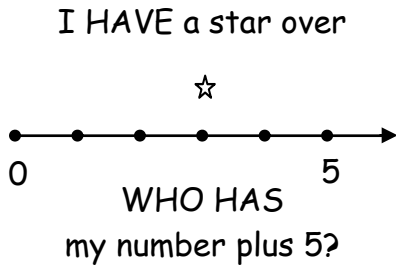
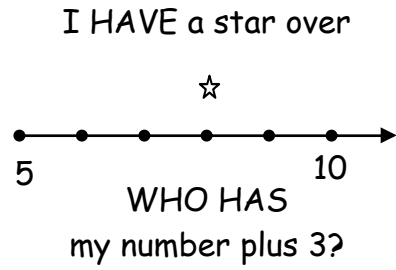


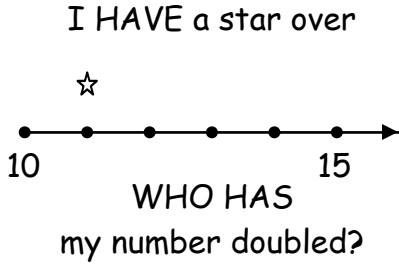
Mary Alice Hatchett © 8/2006



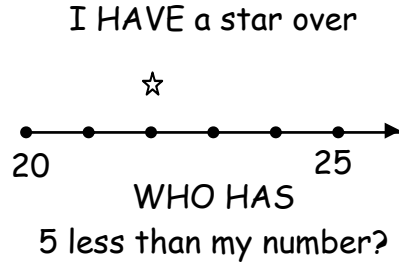
Mary Alice Hatchett © 8/2006



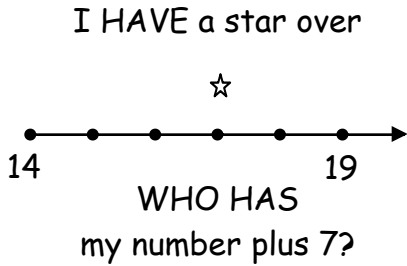
Mary Alice Hatchett © 8/2006



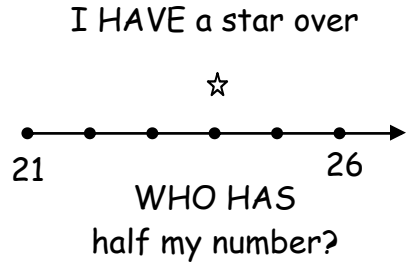
Mary Alice Hatchett © 8/2006



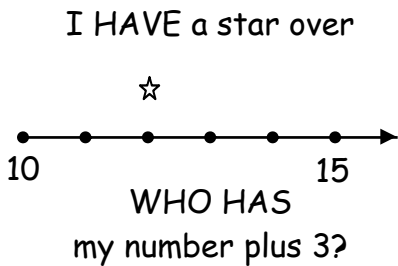
Mary Alice Hatchett © 8/2006



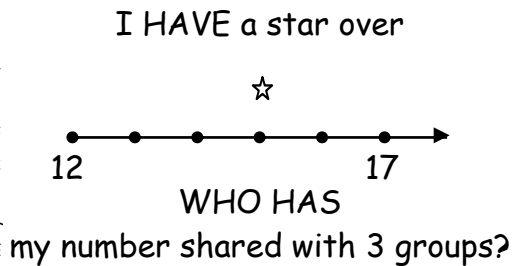
Mary Alice Hatchett © 8/2006



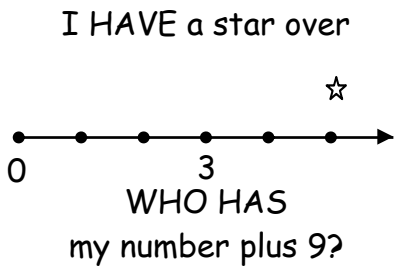
Mary Alice Hatchett © 8/2006



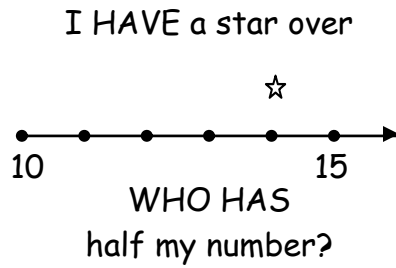
Mary Alice Hatchett © 8/2006



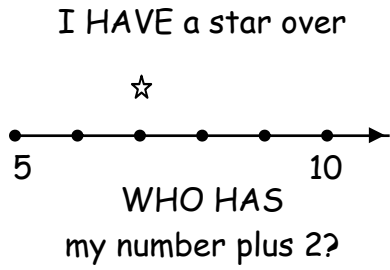
Mary Alice Hatchett © 8/2006



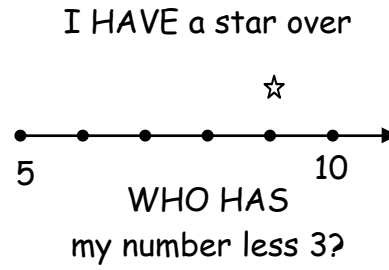
Mary Alice Hatchett © 8/2006



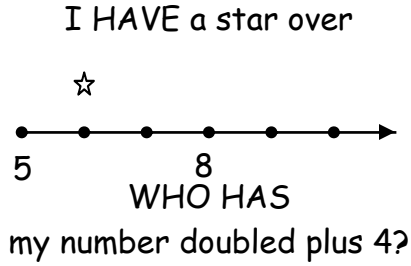
Mary Alice Hatchett © 8/2006



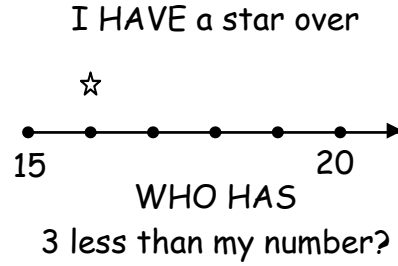
Mary Alice Hatchett © 8/2006



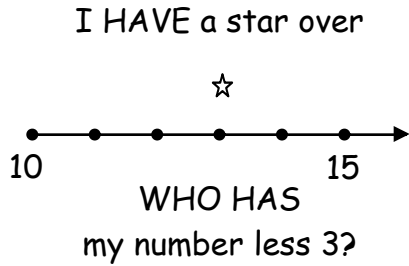
Mary Alice Hatchett © 8/2006



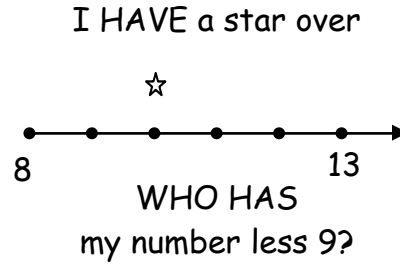
Mary Alice Hatchett © 8/2006



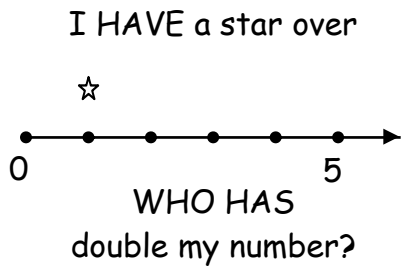
Mary Alice Hatchett © 8/2006



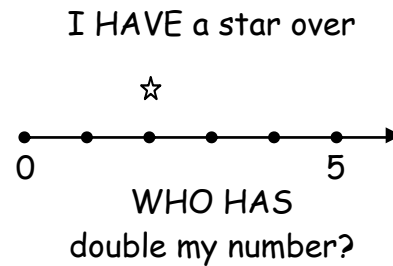
Mary Alice Hatchett © 8/2006



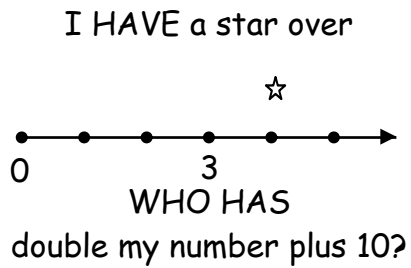
Mary Alice Hatchett © 8/2006



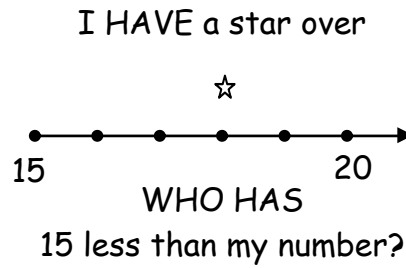
Mary Alice Hatchett © 8/2006



Mary Alice Hatchett © 8/2006


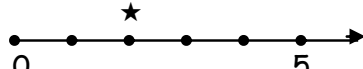

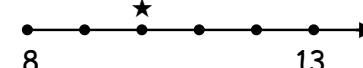
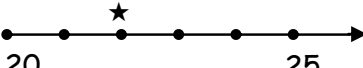


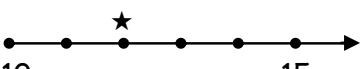

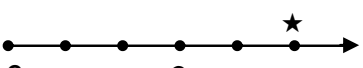
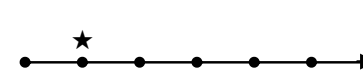
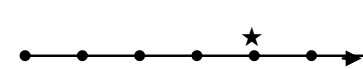


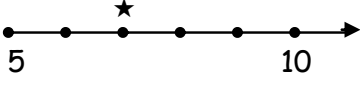
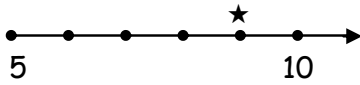

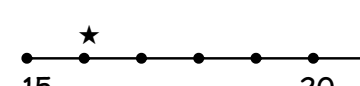

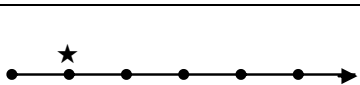
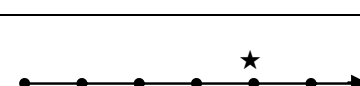

Mary Alice Hatchett © 8/2006



I HAVE a star over:

Name: _____

problem	Star answer	I HAVE	WHO HAS?
			my number plus 5?
			double my number?
			my number plus 3?
			my number less 9?
			5 less than my number?
			my number plus 7?
			half my number?
			my number plus 3?
			my number shared with 3 groups?
1	5		my number plus 9?
			my number doubled plus 4?
2	14		half my number?

		 <p>A number line starting at 5 and ending at 10. There are 6 tick marks in total, including the endpoints. A star is placed above the third tick mark from the left, which represents the number 7.</p>	my number plus 2?
		 <p>A number line starting at 5 and ending at 10. There are 6 tick marks in total, including the endpoints. A star is placed above the fifth tick mark from the left, which represents the number 9.</p>	my number less 3?
		 <p>A number line starting at 0 and ending at 5. There are 6 tick marks in total, including the endpoints. A star is placed above the second tick mark from the left, which represents the number 1.</p>	my number doubled?
		 <p>A number line starting at 15 and ending at 20. There are 6 tick marks in total, including the endpoints. A star is placed above the second tick mark from the left, which represents the number 17.</p>	3 less than my number?
		 <p>A number line starting at 10 and ending at 15. There are 6 tick marks in total, including the endpoints. A star is placed above the third tick mark from the left, which represents the number 13.</p>	my number less 3?
		 <p>A number line starting at 10 and ending at 15. There are 6 tick marks in total, including the endpoints. A star is placed above the second tick mark from the left, which represents the number 11.</p>	my number doubled?
		 <p>A number line starting at 0 and ending at 3. There are 6 tick marks in total, including the endpoints. A star is placed above the fifth tick mark from the left, which represents the number 2.</p>	double my number plus 10?
		 <p>A number line starting at 15 and ending at 20. There are 6 tick marks in total, including the endpoints. A star is placed above the fourth tick mark from the left, which represents the number 18.</p>	15 less than my number?