

Figure out the elapsed time:

1. two in the afternoon to 8 p.m.

Elapsed Time Pass Around★Mary Alice Hatchett 4/2008

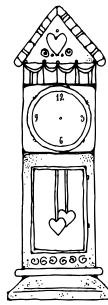


Figure out the elapsed time:

2. seven in the morning to three in the afternoon

Elapsed Time Pass Around★Mary Alice Hatchett 4/2008

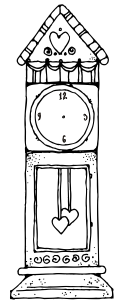


Figure out the elapsed time:

3. 9 a.m. to 9 p.m.

Elapsed Time Pass Around★Mary Alice Hatchett 4/2008

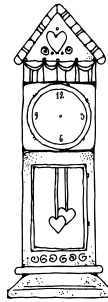


Figure out the elapsed time:

4. three in the morning to eleven in the morning

Elapsed Time Pass Around★Mary Alice Hatchett 4/2008

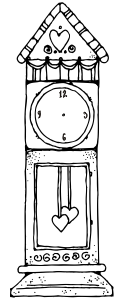


Figure out the elapsed time:

5. 7 a.m. to 5 p.m.

Elapsed Time Pass Around★Mary Alice Hatchett 4/2008

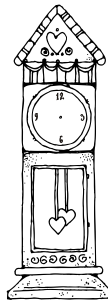


Figure out the elapsed time:

6. noon to four in the afternoon

Elapsed Time Pass Around★Mary Alice Hatchett 4/2008

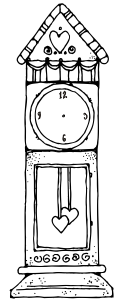


Figure out the elapsed time:

7. one in the morning to ten in the morning

Elapsed Time Pass Around★Mary Alice Hatchett 4/2008

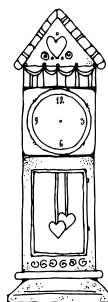


Figure out the elapsed time:

8. one in the afternoon to four in the afternoon

Elapsed Time Pass Around★Mary Alice Hatchett 4/2008

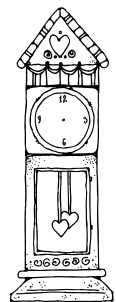


Figure out the elapsed time:

9. 9 a.m. to three in the afternoon

Elapsed Time Pass Around★Mary Alice Hatchett 4/2008

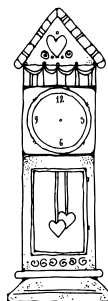


Figure out the elapsed time:

10. five in the afternoon to ten in the evening

Elapsed Time Pass Around★Mary Alice Hatchett 4/2008

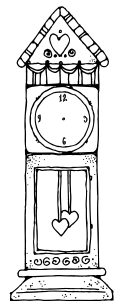


Figure out the elapsed time:

11. nine in the morning to  
nine at night

Elapsed Time Pass Around★Mary Alice Hatchett 4/2008

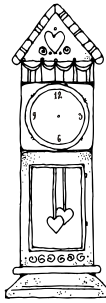


Figure out the elapsed time:

12. ten in the morning to one  
in the afternoon

Elapsed Time Pass Around★Mary Alice Hatchett 4/2008

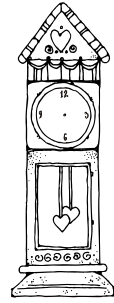


Figure out the elapsed time:

13. 6 a.m. to 1 p.m.

Elapsed Time Pass Around★Mary Alice Hatchett 4/2008

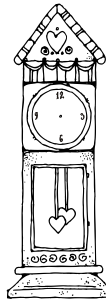


Figure out the elapsed time:

14. six in the morning to  
seven in the morning

Elapsed Time Pass Around★Mary Alice Hatchett 4/2008

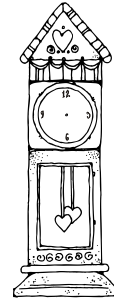


Figure out the elapsed time:

15. seven in the morning to  
eleven in the morning

Elapsed Time Pass Around★Mary Alice Hatchett 4/2008

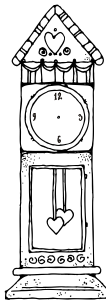


Figure out the elapsed time:

16. 2 a.m. to 12 p.m.

Elapsed Time Pass Around★Mary Alice Hatchett 4/2008

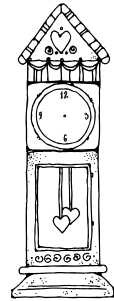


Figure out the elapsed time:

17. 6 p.m. to eleven at night

Elapsed Time Pass Around★Mary Alice Hatchett 4/2008

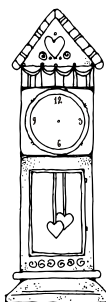


Figure out the elapsed time:

18. 4 p.m. to 5 p.m.

Elapsed Time Pass Around★Mary Alice Hatchett 4/2008

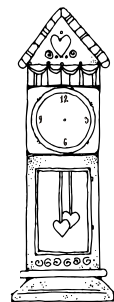


Figure out the elapsed time:

19. seven in the morning to  
one in the afternoon

Elapsed Time Pass Around★Mary Alice Hatchett 4/2008

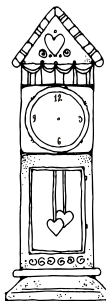


Figure out the elapsed time:

20. seven in the morning  
to eight at night

Elapsed Time Pass Around★Mary Alice Hatchett 4/2008

